



CAT4 Level X Sample Questions

This set of practice questions has been meticulously crafted to help both you and your child in gaining a comprehensive understanding of the CAT4 Level X test.

Detailed explanations and answers for each question can be found conveniently at the bottom of each question.

For those in need of a thorough CAT4 Level X preparation, [I highly recommend this one.](#)

You can read my article about everything you need to know about the [CAT4 Test.](#)

If you find any error in the document, please [report it here](#). I do my best to provide free and quality content; your feedback helps me keep this content relevant and accurate for everyone.



Words sample questions

Choose the word that belongs in the same group as the first three words.

Question:

keyboard | mouse | monitor

Options:

A. Lamp B. Printer C. Bicycle D. Desk E. Spoon

Correct Answer: Printer

Step-by-Step Guide: Keyboard, mouse, and monitor are all computer-related devices (peripherals) used with a computer.

Looking at the options:

- Printer (B) is also a device that connects to a computer. This is the correct choice.
- Lamp (A), bicycle (C), desk (D), and spoon (E) are not typical computer devices or peripherals.

Question:

guitar | piano | violin

Options:

A. Trumpet B. Microphone C. Bow D. Drumstick E. Chair

Correct Answer: Trumpet.

Step-by-Step Guide: Guitar, piano, and violin are all musical instruments.

- Trumpet (A) is another musical instrument. This is the correct answer.
- Microphone (B) is audio equipment, not an instrument itself.
- Bow (C) is an accessory used to play the violin, not an instrument.
- Drumstick (D) is used to play the drums, but it is not an instrument itself.
- Chair (E) is furniture, not a musical instrument.

Numbers sample questions

What number comes next in the series?

5, 10, 20, 40, 80, ?

Possible answers:

- A. 120
- B. 100
- C. 160
- D. 140
- E. 200

Correct answer: C. 160

Explanation:

In this series, each number is **twice** the previous number.

$$5 \times 2 = 10$$

$$10 \times 2 = 20$$

$$20 \times 2 = 40$$

$$40 \times 2 = 80$$

The next number in the series is:

$$80 \times 2 = \mathbf{160}.$$

Answer C (160) is the correct answer.

What number comes next in the series?

100, 95, 90, 85, 80, ?

Possible answers:

- A. 75
- B. 70
- C. 78
- D. 77
- E. 65

Correct answer: A. 75

Explanation:

In this series, each number **decreases by 5** from the previous number.

All rights reserved to <https://cat4-prep.com>

| Get more [CAT4 Sample Questions Here](#)

$$100 - 5 = 95$$

$$95 - 5 = 90$$

$$90 - 5 = 85$$

$$85 - 5 = 80$$

The next number in the series is:

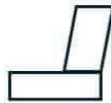
$$80 - 5 = \mathbf{75}.$$

Answer A (75) is the correct answer.

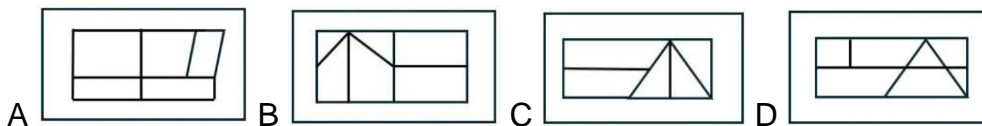
Shapes sample questions

Choose the answer choice that contains the given shape. The shape must keep its size and orientation.

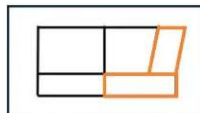
Shape:



Options:

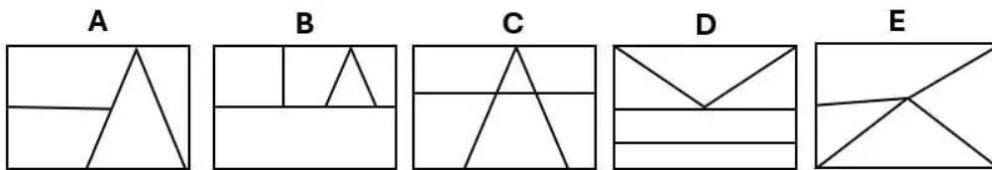



Solution: A

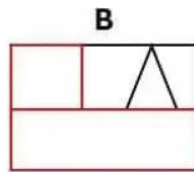


Choose the answer choice that contains the given shape. The shape must keep its size and orientation.

Shape:



Answer:



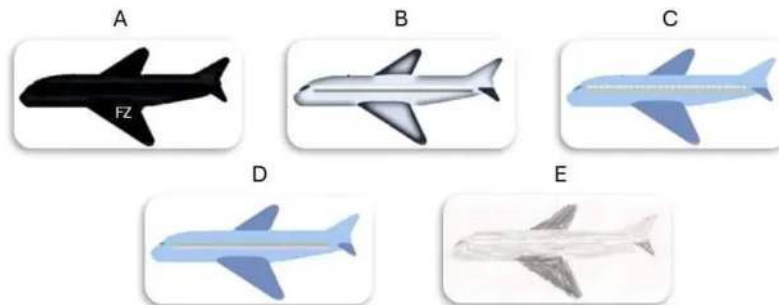
Figures sample questions

Choose the option that matches the common characteristic of the three images above.


Question:



Options:



Answer: All the airplanes are black with white markings on their wings. The only option that shares these same characteristics is Option A.



Question:



Options:



A B C D E

Answer: All objects share the same characteristic of having 3 windows. The submarine in option **B** is the only figure to share those characteristics.



Conclusion

I hope you've found the free sample questions provided here valuable. Suppose you're searching for a more powerful resource to help you conquer the CAT4 challenge and reach a new academic height. In that case, this British-flavored, child-friendly website is here to lead you through the maze of questions, making the learning experience enjoyable engaging and effective!

[Click here to get more sample questions.](#)